


# The Cautious Caterpillar Addition to 10

Add the number of things and write your answers in the box.



+



=



+




=




+



=




+



=



+



=

# The Cautious Caterpillar Addition to 10

Solve the calculations and write your answers in the boxes.

$5 + \begin{array}{cc} \text{bee} & \text{bee} \\ \text{bee} & \text{bee} \end{array} = \square$

$4 + \begin{array}{ccc} \text{butterfly} & \text{butterfly} & \text{butterfly} \\ \text{butterfly} & \text{butterfly} & \text{butterfly} \end{array} = \square$

$6 + \text{sunflower} = \square$


$2 + \begin{array}{cccc} \text{leaf} & \text{leaf} & \text{leaf} & \text{leaf} \end{array} = \square$

$3 + \begin{array}{cc} \text{flower} & \text{flower} \\ \text{flower} & \text{flower} & \text{flower} \end{array} = \square$


# The Cautious Caterpillar Addition to 10

Work out the calculation and write the missing numbers in the boxes.

Then, write the number sentences on the lines below.



+



=


8



+





=



+



=




+




=

10



+



=

